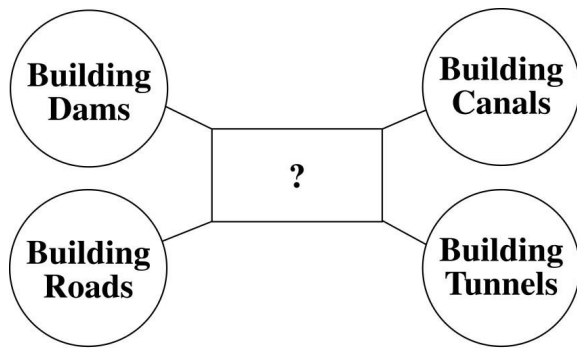


Social Studies

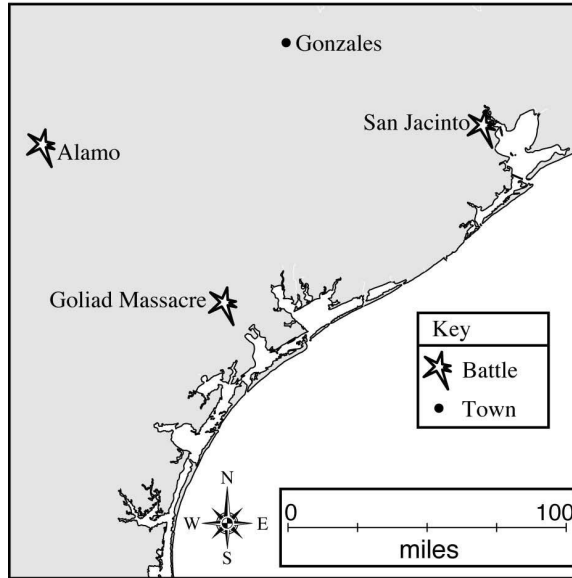
10 3rd Grade



Which of the following completes the web?

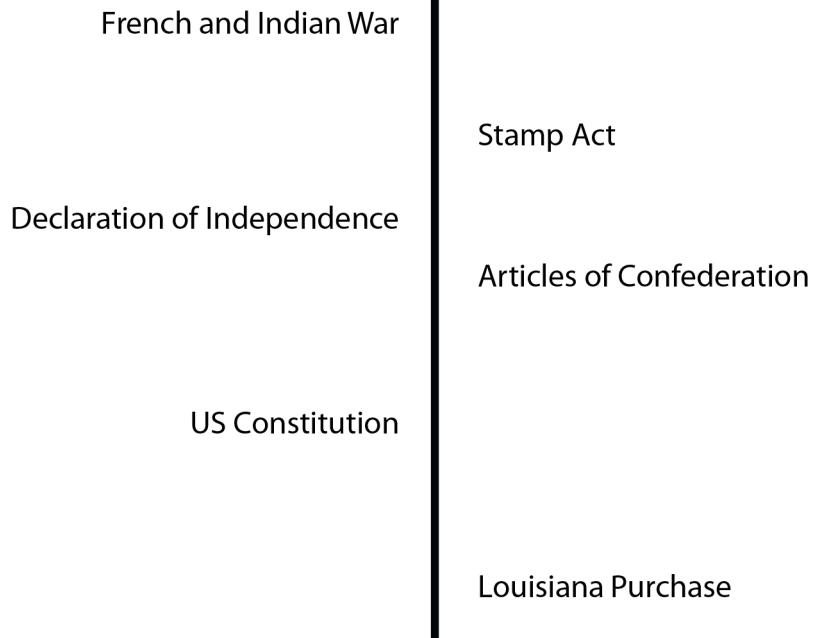
- F** How Explorers Traveled Long Ago
- G** How People Modify the Environment
- H** How the Government Protects Citizens
- J** How Settlements are Developed

Texas Revolution



About how many miles did the Texas forces travel from Gonzales to San Jacinto?

- A 80
- B 100
- C 125
- D 150



If you were to place the Northwest Ordinance on this timeline, where would you place it?

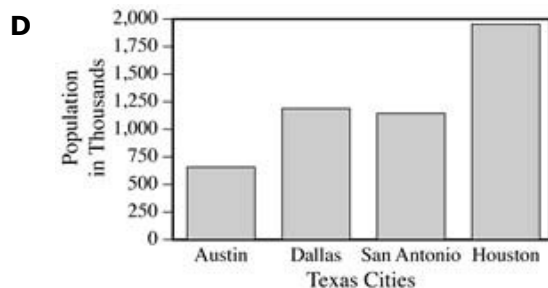
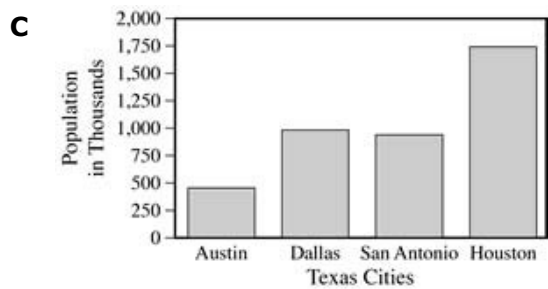
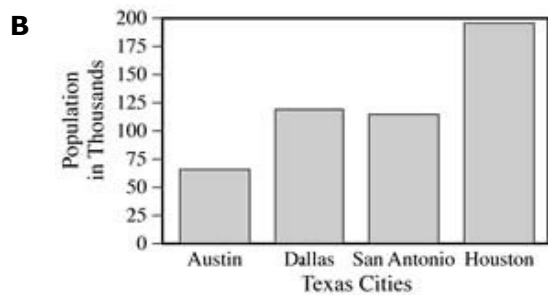
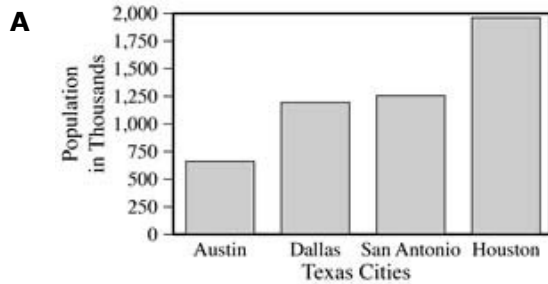
- F** between the Stamp Act and the Articles of Confederation
- G** between Declaration of Independence and the Articles of Confederation
- H** between the Articles of Confederation and the US Constitution
- J** between the US Constitution and the Louisiana Purchase

13 6th Grade

The population of four Texas cities in the year 2000 was as follows:

- Houston - 1,953,631;
- Dallas - 1,188,580;
- San Antonio - 1,144,646;
- Austin - 656,562.

Which of the following shows the correct way to graph this information?



14 7th Grade

I, as President of the Republic, with my officers, am now present to surrender into the hands of those whom the people have chosen . . .

The lone star of Texas, which ten years since arose amid clouds over fields of carnage, and obscurely shone for a while, has culminated, and, following an inscrutable destiny, has passed on and become fixed forever in that glorious constellation which all freemen and lovers of freedom in the world must reverence and adore - the American Union . . .

Speech by Anson Jones

The excerpt from this speech by Anson Jones in 1846 refers to which of the following?

- F** the defeat of the Mexican army
- G** the annexation of Texas to the United States
- H** Texas becoming a republic
- J** Texas withdrawing from the Union

Use the excerpt and your knowledge of social studies to answer the following question.

It is natural for a republic to have only a small territory; otherwise it cannot long subsist. In an extensive republic there are men of large fortunes, and consequently of less moderation; there are trusts too considerable to be placed in any single subject; he has interests of his own; he soon begins to think that he may be happy and glorious, by oppressing his fellow-citizens; and that he may raise himself to grandeur on the ruins of his country.

In an extensive republic the public good is sacrificed to a thousand private views; it is subordinate to exceptions, and depends on accidents. In a small one, the interest of the public is more obvious, better understood, and more within the reach of every citizen; abuses have less extent, and, of course, are less protected.

—Baron de Montesquieu, *Spirit of Laws*, 1748

- 15 Why is this excerpt of Montesquieu used by anti-federalists to argue against the ratification of the U.S. Constitution?
- A a large, national republic would lead to corruption
 - B a small republic can be easily taken over by one person
 - C a national government needs to be led by a chief executive
 - D a republican form of government would protect the common good

16 **World Geography**

**Prescribed Burning –
Taos, New Mexico City Council**

Pro	Con
Reduces the accumulation of fuel	Allows unwanted plants to grow
Recycles nutrients into the soil	Kills plants and animals
Reduces plant competition	Causes soil erosion

Which of the following processes does the chart show?

- F type of land conservation
- G improvement of air quality
- H preservation of native plants
- J development of public policy



The political cartoon above is referencing the consequence of what historic event?


- A Yalta Conference
- B bombing of Hiroshima
- C 10 Year Non-Aggression Pact
- D formation of United Nations

18 US History

Laws permitting, and even requiring, their separation in places where they are liable to be brought into contact do not necessarily imply inferiority of either race to the other . . . We consider the underlying fallacy of the plaintiff's argument to consist in the assumption that the enforced separation of the two races stamps the colored race with a badge of inferiority. If this be so, it is not by reason of anything found in the act, but solely because the colored race chooses to put that construction upon it . . .

Which of the following is being referenced in the excerpt above?

- F** 15th Amendment
- G** Plessy vs. Ferguson
- H** Sevelalty Act of 1877
- J** Brown v. Board of Education



If you were writing a story about this cartoon, which of the following would describe your main character?

- A** a man who spent all his money on food and clothes
- B** a political leader who was getting fat off of bribes and kick- backs
- C** a man who lost all of his money helping others
- D** a man who found a bag of money